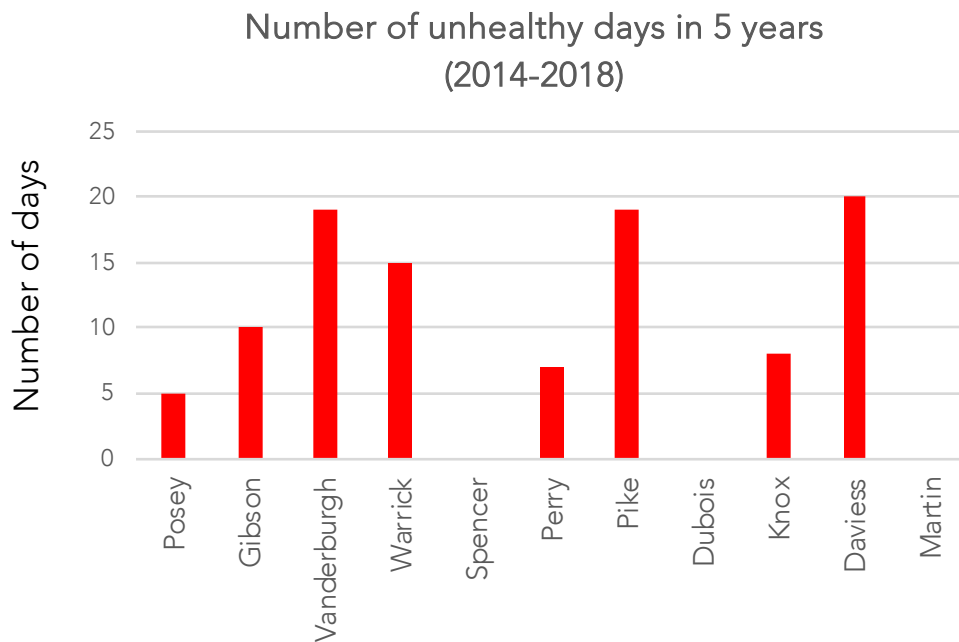


## PROBLEM B

## HOW MANY UNHEALTHY DAYS IN OUR AREA?

Bar graphs  
>, < or = symbols

The bar graph below shows how many unhealthy days counties in Southwest Indiana had for the last 5 years.



- Which county had the largest number of unhealthy days?
- Which county had more unhealthy days, Warrick county or Posey county?
- Use < , > or = to show which had more unhealthy days.

For example,

Posey



Gibson

Warrick



Vanderburgh

Perry



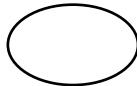
Dubois

Posey



Pike

Knox

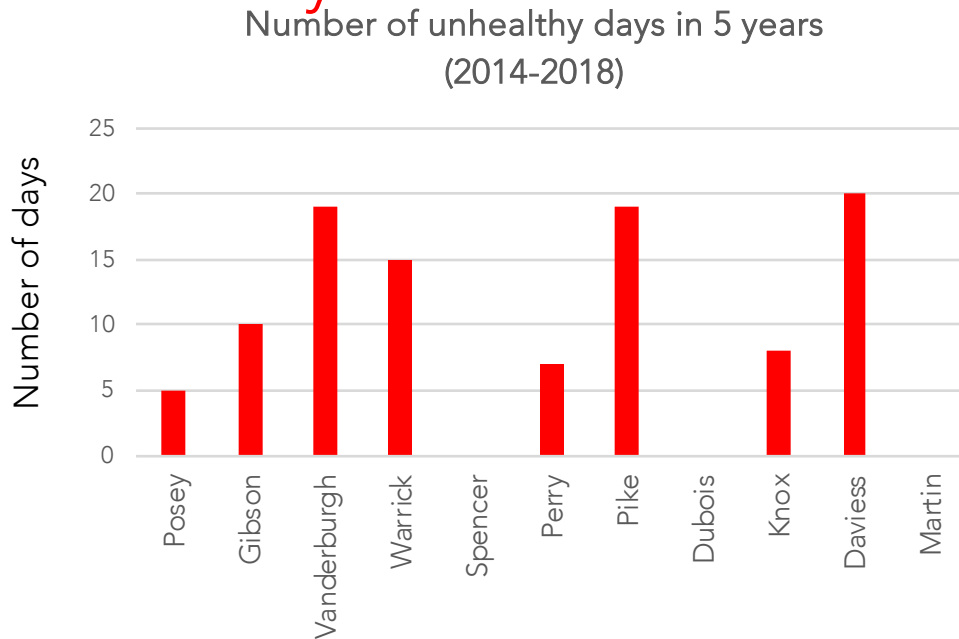


Gibson



The bar graph below shows how many unhealthy days counties in Southwest Indiana had for the last 5 years.

# Answer Key



1. Which county had the largest number of unhealthy days?

Daviess county

2. Which county had more unhealthy days, Warrick county or Posey county?

Warrick county

3. Use < , > or = to show which had more unhealthy days.

For example,

Posey



Gibson

Warrick



Vanderburgh

Perry



Dubois

Posey



Pike

Knox



Gibson

